

Ordne die Zahlen nach der Größe

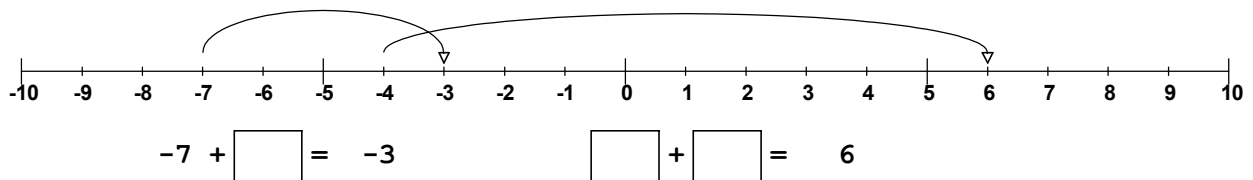
1. -44 5 79 18 -89 -52 -55 9 -33 -4 -8 34 -63

2. -11 -60 -64 -27 -39 -90 -72 -21 -14 -7 -85 -51 -56

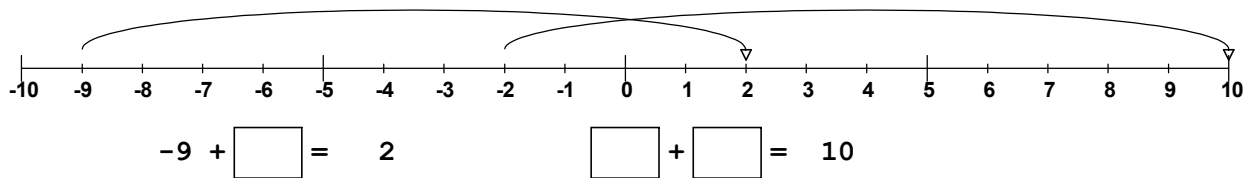
3. -34 86 -1 -4 56 33 -22 -42 -64 -19 52 -38 29

Ergänze die Aufgaben passen zu den Pfeilen an der Zahlengeraden!

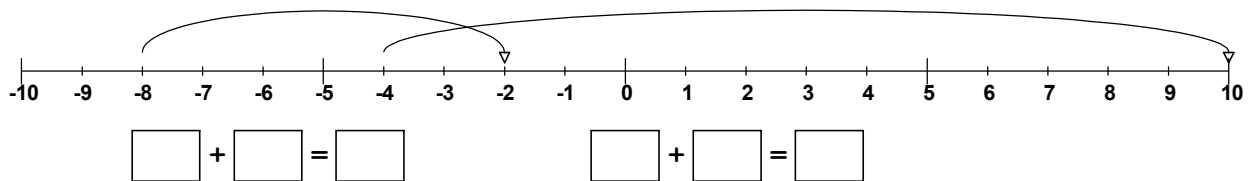
4. .



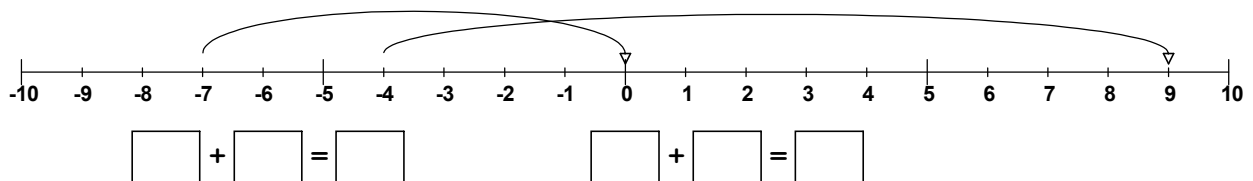
5. .



6. .



7. .



Ordne die Zahlen nach der Größe

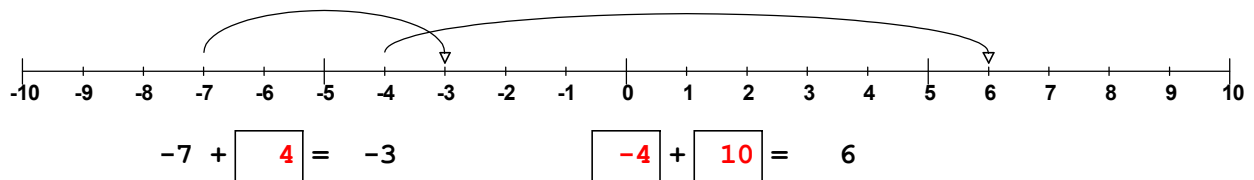
1. -44 5 79 18 -89 -52 -55 9 -33 -4 -8 34 -63  
 -89 -63 -55 -52 -44 -33 -8 -4 5 9 18 34 79

2. -11 -60 -64 -27 -39 -90 -72 -21 -14 -7 -85 -51 -56  
 -90 -85 -72 -64 -60 -56 -51 -39 -27 -21 -14 -11 -7

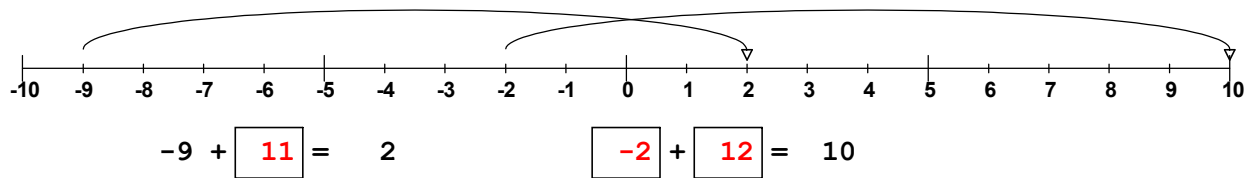
3. -34 86 -1 -4 56 33 -22 -42 -64 -19 52 -38 29  
 -64 -42 -38 -34 -22 -19 -4 -1 29 33 52 56 86

Ergänze die Aufgaben passen zu den Pfeilen an der Zahlengeraden!

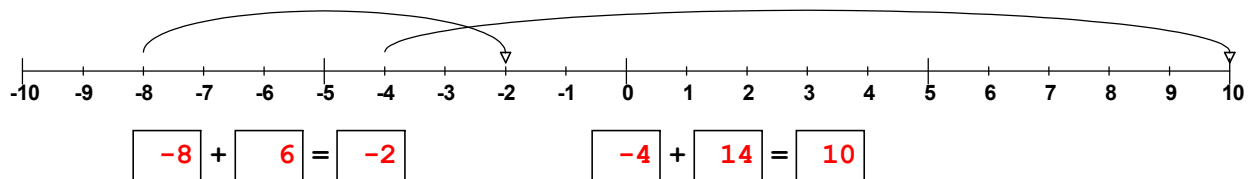
4. .



5. .



6. .



7. .

